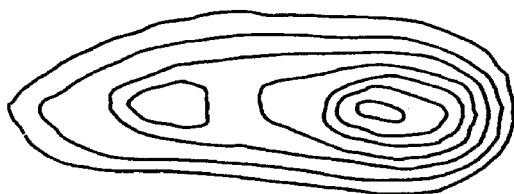


INTERPRÉTATION DES COURBES DE NIVEAU


Faire correspondre le diagramme de courbes à gauche à l'image de la forme de relief à droite.



1



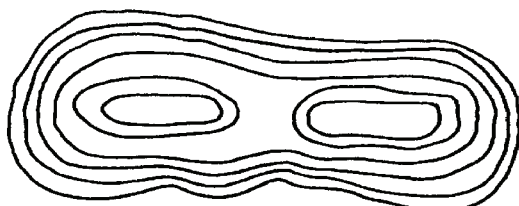
A



2




B



3



C



4



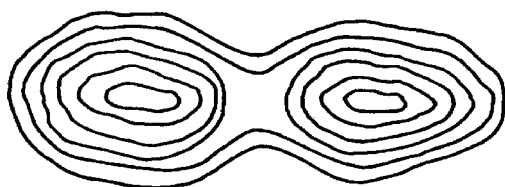
D



5



E



6



F

1. _____

2. _____

3. _____

4. _____

5. _____

6. _____

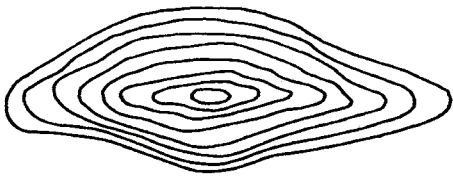
INTERPRÉTATION DES COURBES DE NIVEAU
RÉPONSES



1



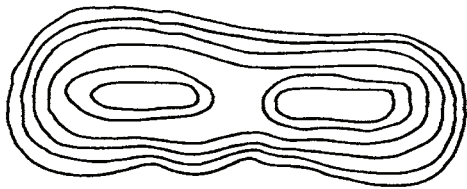
A



2



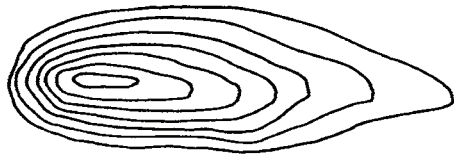
B



3



C



4




D



5



E



6



F

1. B

4. C

2. E

5. F

3. D

6. A